
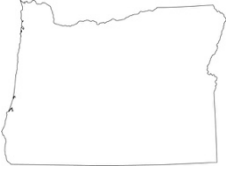



Assessment

Mrs. Brown's class received some postcards. Each is one postcard. Count each to find the number of postcards received from each state. Write the number on the line given.

State	Number of Postcards Received		
 California	<input type="checkbox"/> <input type="checkbox"/> <input type="checkbox"/> <input type="checkbox"/>	<input type="checkbox"/> <input type="checkbox"/> <input type="checkbox"/> <input type="checkbox"/>	<input type="checkbox"/> <input type="checkbox"/> <input type="checkbox"/> <input type="checkbox"/> How many postcards came from California? _____
 Oregon	<input type="checkbox"/> <input type="checkbox"/>	<input type="checkbox"/> <input type="checkbox"/>	<input type="checkbox"/> <input type="checkbox"/> How many postcards came from Oregon? _____
 Washington	<input type="checkbox"/> <input type="checkbox"/> <input type="checkbox"/>	<input type="checkbox"/> <input type="checkbox"/> <input type="checkbox"/>	<input type="checkbox"/> <input type="checkbox"/> <input type="checkbox"/> How many postcards came from Washington? _____

Questions:

1. Which state sent the most postcards to Mrs. Brown's class?

- a. Washington b. Oregon
- c. California

2. Which state sent the least amount of postcards to Mrs. Brown's class?

- a. California b. Oregon
- c. Washington

3. Did any states have an equal number of postcards?

- a. Yes b. No

Answer Key

Assessment

California 9

Oregon 5

Washington 8

1. c

2. b

3. b

Name _____

My Postcards

Land	Water

I saw more pictures of _____

in my postcards.