
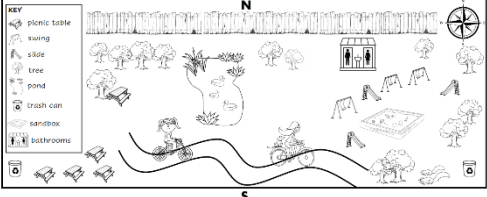
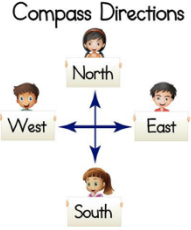





Name _____

Vocabulary Assessment

<p>1</p> 	<p>2</p> 	<p>3</p> 
<p>4</p> 	<p>5</p> 	<p>6</p> 

Match the number with the correct part of a map.

grid		legend or key	
compass		symbols	
map		directions	

Vocabulary Assessment - Answer Key

grid	5	legend or key	6
compass	1	map symbols	4
map	2	cardinal directions	3