

Directions Observation Sheet


Mark Y or N for each set of objects mapped. You can write more than one attempt in the boxes.

Student Group Names	Correct Direction	Correct Measurement
Example: Joe, Anita, Ana	Y Y Y Y	N Y N Y
1.		
2.		
3.		
4.		
5.		
6.		
7.		
8.		
9.		
10.		

Treasure Map A

Name _____ Date _____

On the map, finish labeling the compass rose.

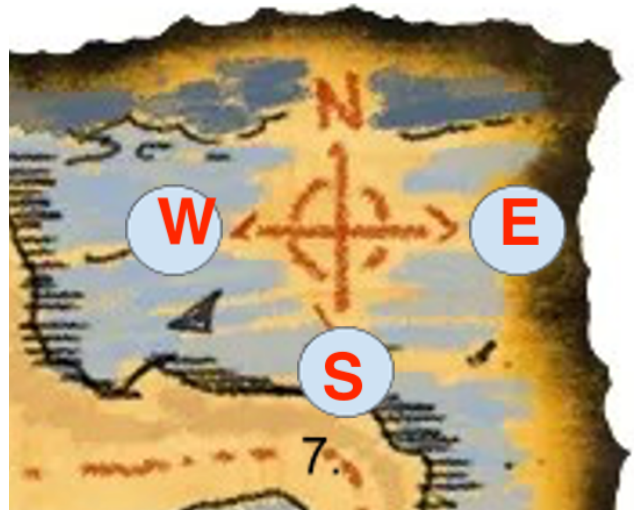



Give directions to the treasure. Start at the green dot. **Use only north, east, south or west.**

- | | |
|-------------------|--------------------------------|
| 1. Go south _____ | 7. Go _____ past the fish pond |
| 2. Then go _____ | 8. Then head _____ |
| 3. Now go _____ | 9. Go _____ |
| 4. Next go _____ | 10. Next go _____ |
| 5. Go _____ | 11. Now head _____ |
| 6. Turn _____ | 12. Finally, go _____ |

Treasure Map A or B Answer Key

1. Go south
2. Then go east
3. Now, go north
4. Next, go east or NE
5. Go south
6. Turn east
7. Go south past the fishpond
8. Then head west
9. Go north or NW
10. Next, go west
11. Now head south or SW
12. Finally, go west





Treasure Map B

Name _____

Label the compass rose with the missing directions.

Give directions to the treasure. Use the following directions to fill in the blanks below.

north	east	south	west
northeast	northwest	southeast	southwest

Start at the green dot.

- | | |
|-------------------|--------------------------------|
| 1. Go south _____ | 7. Go _____ past the fish pond |
| 2. Then go _____ | 8. Then head _____ |
| 3. Now go _____ | 9. Go _____ |
| 4. Next go _____ | 10. Next go _____ |
| 5. Go _____ | 11. Now head _____ |
| 6. Turn _____ | 12. Finally, go _____ |